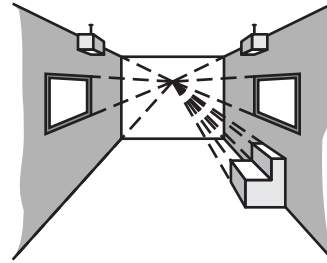


Challenge: Skills and Applications

For use with pages 10–16


An example of a *two-point perspective drawing* is shown on page 15 of your textbook.

In a *one-point perspective drawing*, there is only one vanishing point. Horizontal lines going across the viewer's field of vision are shown as horizontal, and, as in a two-point perspective drawing, vertical lines are shown vertical. An example of a one-point perspective drawing is shown at the right.

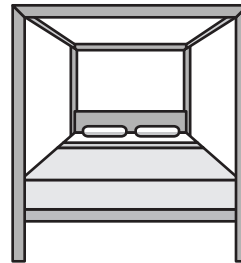


In Exercises 1–4, identify the drawing as *one-point perspective*, *two-point perspective*, or *neither*.

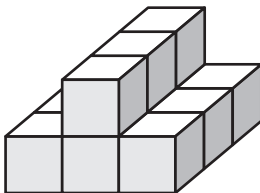
1.



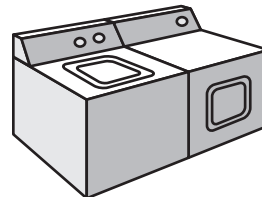
2.



3.



4.



5. Create an original one-point perspective drawing and an original two-point perspective drawing. Identify which drawing is which.